

WELLAND GOULDSMITH SCHOOL

Class III

Fun with numbers

Time : 30 mins

I. Write the missing number

a) 561 661 961

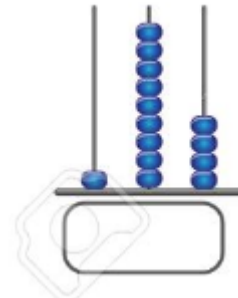
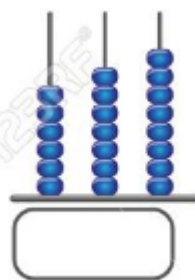
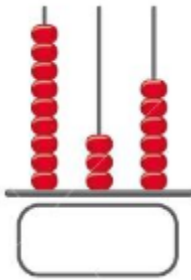
b) 420 425 430 445

c) 100 150 300

II. Complete the sum and write the answer in the water drop



III. Write the number represented on the abacus



IV. Circle the smallest number in each group

a) 342, 398, 289

b) 374, 473, 743

c) 635, 563, 365

V. Rewrite the numbers in ascending order

a) 674, 764, 476, 746, 600

b) 877, 787, 887, 878, 780